
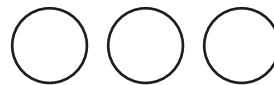


Shade $\frac{1}{2}$ of the circles ?




Shade $\frac{2}{3}$ of the circles ?



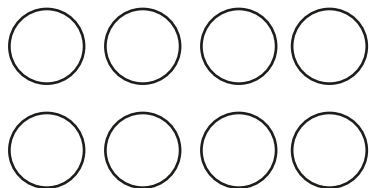
Shade $\frac{3}{4}$ of the circles ?




Shade $\frac{2}{6}$ of the circles ?




Shade $\frac{5}{8}$ of the circles ?



Shade $\frac{6}{9}$ of the circles ?



Shade $\frac{7}{12}$ of the circles ?



Shade $\frac{9}{15}$ of the circles ?

